

Good morning Tulane!

I hope you all had a great day yesterday; you have worked so hard this week, well done!

Please check the timetable on our class page on the website for what the activities are for this week.

1. **Baddesley bag or Spellings** – test yourself on this weeks spellings.
2. Get moving and do some exercise!
3. **Maths** – These are below and also on Learners Pool. We are a week behind the White Rose programme so please make sure you go to the correct one!

**Year 3 + 4 – Friday Family Challenge** – Week 4 Lesson 5  
See below and on Learners Pool

Year 3 – Q1-4 but why not try some more with your family!  
Year 4 – Q1-5 but why not try some more with your family!

4. **Topic** – The Bronze Age – there is a power point on Learners Pool
5. There is a mindfulness activity below if you would like to do it.

Oxford Owl login for new books.

(My class login - User: tulane password: Baddesley1) <https://home.oxfordowl.co.uk/books/free-ebooks/>

Have a great day everybody and please upload any of the work that you are doing as I love to see it! You can also see the comments that I leave for you!


If you have any questions please do email me on [l.fairlie@southbaddesley.hants.sch.uk](mailto:l.fairlie@southbaddesley.hants.sch.uk)

Have a great weekend and have a lovely half term break you deserve it!

Miss Fairlie

## Challenge 1

Eric bakes these two trays of muffins.



He eats 2 muffins.


His dad eats 3 muffins.

His sister eats 4 muffins.

How many muffins does he have left?

## Challenge 2

Lola buys this key ring.



Her mum gives a quarter of the money.

She pays for the rest herself.

How much does she pay herself?

### Challenge 3



How old is the teacher?

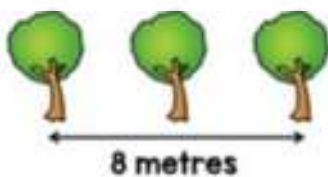
### Challenge 4

Ten trees are planted in a row.



The trees are spaced out equally.

The distance between the fourth and sixth tree is 8 metres.



What is the distance between the first and last tree?

## Challenge 5

Filip has these five digit cards.



He uses all of the cards to make a three-digit number and a two-digit number.

He multiplies the two numbers together and the answer is **15,741**.

$$\begin{array}{r} \phantom{\times} \phantom{00} \square \square \square \\ \times \phantom{00} \phantom{00} \square \square \\ \hline 15741 \end{array}$$

What are the two numbers Filip makes?



Name:

We completed the  
White Rose Maths Challenge!



We got ..... right!



#WRMChallenge

Mindfulness Activity

Find a safe, quiet area to go through these 5 yoga poses.

**CALM DOWN YOGA FOR KIDS**

	<b>I am strong.</b>	
	<b>I am kind.</b>	
	<b>I am brave.</b>	
	<b>I am friendly.</b>	
	<b>I am wise.</b>	