

Day 26 (11/05/2020)

Hi,

Hope you had a great Bank Holiday weekend and got involved in the VE Day activities in your street/garden or watched a bit on TV. I want to hear all about it, and that will be Wednesday writing prompt. There are more handwriting booklets in the pool if you've finished the ones you were given by me.

If you have a Baddesley Bag please don't forget to do those activities too.

Spelling and handwriting (20 minutes)

From the booklet you've already started, adding some words of your own that fit the rule and put 5 in sentences.

Maths (Marvellous Maths club for some or:

Year 4 – **Summer Week 3** – Friday Maths Challenge for year 4

<https://whiterosemaths.com/homelearning/year-4/>

Year 5 – **Summer Week 3** - Friday Maths Challenge for year 5

<https://whiterosemaths.com/homelearning/year-5/>

And a video by me to accompany these challenges, which are hard.

<https://youtu.be/fpOruTGpJTc> and <https://youtu.be/Nw-VW6oGyEQ>

apologies for the cut in the film, I had to take a phone call 😊

Guided Reading

The Wild Robot Escapes – lesson 9 – The effect of carefully chosen sentence structures have on a reader and inferring a character's feelings, namely Roz.

Instructions below or in the pool.

Art and craft activity: see below.

Please show me your work, I love seeing it! I comment on quite a few, so check back, it makes me feel like a proper teacher if you respond to my comments. It's a key part of your learning, getting feedback and learning from it, it also humours me!

Let me know how you are getting on with your work, and life in general. You can do this by your parents emailing me. All feedback welcome 😊

Suzanne.whitehead@southbaddesleypri.co.uk

Miss Whitehead

Yr 4 maths

Challenge 1

This is half of Lee's strawberries.



How many strawberries does Lee have?


This is half of Lee's shape.



What could the whole shape look like?

Challenge 2

Tim buys a lolly and a chew.



The lolly costs 12p more than the chew.


The total cost of the two items is 82p.

How much does the lolly cost?

Challenge 3

Stickers come in packs of 5.

Max buys 12 packs.



He gave his three friends some stickers.

They each receive the same number.

He has 27 stickers left.

How many stickers did Max give each of his friends?

Challenge 4

Here are 3 containers.



- The jug can hold **1500 mL**.
- The bucket can hold **2 litres**.
- The barrel can hold **15 litres**.

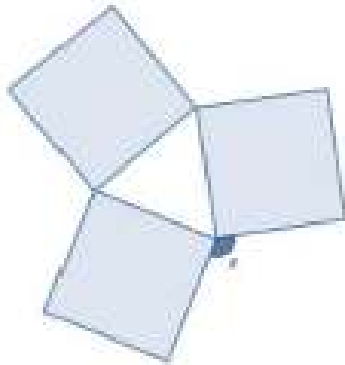
Anisa wants to fill the barrel with water.

Find 2 ways that Anisa can fill the barrel using the jug and bucket.

So, all the above plus try.....

Challenge 5

Three identical squares are arranged to make this pattern.



What is the size of the angle marked x ?

Challenge 6

Here is a 3 x 3 grid with some shapes in.

			108
			102
			95

Each shape represents a number.

The sum of each row is shown at the right of the table.

Find the value of each of the shapes.

Challenge 7

Megan puts 4 fractions in order, starting with the smallest.

$$\frac{1}{2} \quad \frac{}{8} \quad \frac{7}{} \quad \frac{}{5}$$

She has spilt some paint on some parts of the fractions.

What could the missing numbers be?

Challenge 8

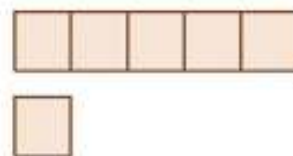
Connor has five times as much money as Jayden.

Connor gives some money to Jayden.

They now have £8.52 each.

How much did Connor have at the start?

Hint: The diagram below may help you.



More Maths:

Convince me with workings and examples to back up your answers.



Sometimes, always, never?

1. If you multiply an even number by 5, the answer is a multiple of 10.
2. A hexagon has no lines of symmetry.
3. If you fold a square in half, you get two triangles.
4. An even number divided by an even number equals an even number.
5. Multiplying gives a higher answer than the number you started with.

TIP – find answers that prove it to be correct, find examples that may prove it to be incorrect, then you will know whether it is sometimes true, always true or never true and you will have answers to prove it.

Guided Reading

The Wild Robot Escapes by Peter Brown



Lesson Nine

We are learning how sentence structure impacts on the mood of the story.

We are learning to use our skills of inference to explore a character's feelings and behaviour.

Task one

Listen and read along to episode eleven (Ch. 42 to 46) of the Wild Robot Escapes. You will find all you need in the Learner's Pool.

In this episode the children carry out an operation on Roz. Here are some sentences from the chapter.

Roz's body relaxed. Her quiet whirring slowly stopped. Her eyes faded to black.
Roz's body tensed. Her quiet whirring slowly started. Her eyes began to glow.

What do you notice about these sentences?

(Make comparisons to most of the other sentences in the book)

.....

.....

.....

How do they make you feel?

(Remember, as an author we choose our words and sentences very carefully to have impact, make the reader feel what we want them to feel. What effect is the author trying to have on you?)

.....

.....

.....

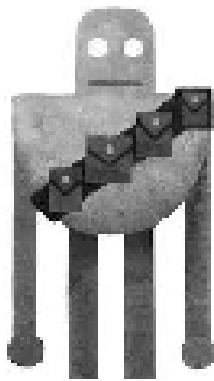
.....

.....

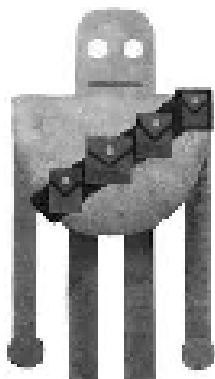
Task two

Roz seems to have mixed feelings; sometimes she seems full of courage and other times she seems fearful. Can you **find** parts of this episode that show Roz is courageous and in contrast parts of the episode where Roz is more fearful? You could draw two images of Roz and annotate one with moments of courage and one with moments of fear.

Moments of courage....



Moments of fear.....



Art and craft Activity

Nature Paint Brushes



You will need:

- Sticks (1 for each paint brush)
- Lots of interesting pieces of nature
- Elastic bands (or string)
- Poster paint
- Large roll of paper

You could use string or coloured wool instead of elastic bands!

Collecting your nature for this activity is half the fun. Go on a walk and see what interesting things you can find. Look for different textures and patterns. Talk about which pieces of nature you think will make good prints.

Making the nature paint brushes is easy: Simply attach a piece of nature to each stick using an elastic band (or a piece of string).

TIP: To avoid breaking your pieces of nature put the elastic bands onto the sticks first and then slide your pieces of nature into the bands. Make sure the elastic bands aren't too tight. You may need more than one band to keep your nature in place.

Now it's time to get painting!

Explore the different patterns and textures that your paintbrushes can create. I can't wait to see some of your masterpieces!